







A = 


F = 

B = 

G = 

C = 

H = 

D = 

I = 

E = 

1. $\sqcup \square \sqcap$ _____

2. $\sqcup \square \square \sqsubset$ _____

3. $\sqcap \sqcup \sqsupset$ _____

4. $\sqcup \sqcup \sqsupset$ _____

5. $\sqcap \sqsupset \sqsupset$ _____

6. $\sqcap \square \sqcup \sqsupset$ _____